



History 12
Examination Booklet
August 2006
Form A

DO NOT OPEN ANY EXAMINATION MATERIALS UNTIL INSTRUCTED TO DO SO.
FOR FURTHER INSTRUCTIONS REFER TO THE RESPONSE BOOKLET.

Contents: 23 pages

51 multiple-choice questions (maximum of 51 marks)
3 written-response questions (maximum of 41 marks)

Examination: 2 hours
Additional Time Permitted: 60 minutes
© Province of British Columbia

PART A: MULTIPLE CHOICE

Value: 51 marks

Suggested Time: 45 minutes

INSTRUCTIONS: For each question, select the **best** answer and record your choice on the **Answer Sheet** provided. Using an HB pencil, completely fill in the bubble that has the letter corresponding to your answer.

You have **Examination Booklet Form A**. In the box above #1 on your **Answer Sheet**, fill in the bubble as follows.

Exam Booklet Form/ Cahier d'examen	A	B	C	D	E	F	G	H
	<input checked="" type="radio"/>	<input type="radio"/>	<input type="radio"/>	<input type="radio"/>	<input type="radio"/>	<input type="radio"/>	<input type="radio"/>	<input type="radio"/>

1. Which country increased the size of its empire as a result of the Paris Peace Treaties of 1919?
 - A. Russia
 - B. Britain
 - C. Turkey
 - D. Austria

2. Which of the following was awarded national self-determination as a result of the Paris Peace Treaties of 1919?
 - A. Russia
 - B. Poland
 - C. Palestine
 - D. Sudetenland

3. Which world leader proposed collective security through a League of Nations?
 - A. Wilson
 - B. Orlando
 - C. Clemenceau
 - D. Lloyd George

4. At the end of the First World War which country had the most powerful economy in the world?
- A. Japan
 - B. Britain
 - C. France
 - D. the U.S.A.
5. Which of the following is an accurate statement about the world in 1919?
- A. Allied nations owed large war debts.
 - B. European empires had all been disbanded.
 - C. The U.S.A. was committed to the defense of Europe.
 - D. Problems associated with nationalism in Europe no longer existed.

Use the following newspaper headline to answer question 6.



6. Which of the following was a direct result of the event reported?
- A. the Russian Civil War
 - B. the triumph of Stalin over Trotsky
 - C. Tsar Nicholas II's abdication from the throne
 - D. Bolshevik victory in the November Revolution

Use the following quotation to answer question 7.

... there is nothing more important for the world than our revolution; the revolution has to be safeguarded no matter what the price.

Lenin (February, 1918)

7. What resulted from Lenin's insistence that the revolution be safeguarded at any price?

- A. the Treaty of Versailles
- B. the Treaty of Brest-Litovsk
- C. the overthrow of Nicholas II
- D. the exile of Trotsky from the U.S.S.R.

8. What was a characteristic of **both** Italy and Britain during the 1930s?

- A. trade unions
- B. private ownership
- C. multi-party elections
- D. guaranteed civil liberties

9. For what reason did Mussolini enjoy a boost in popularity in 1929?

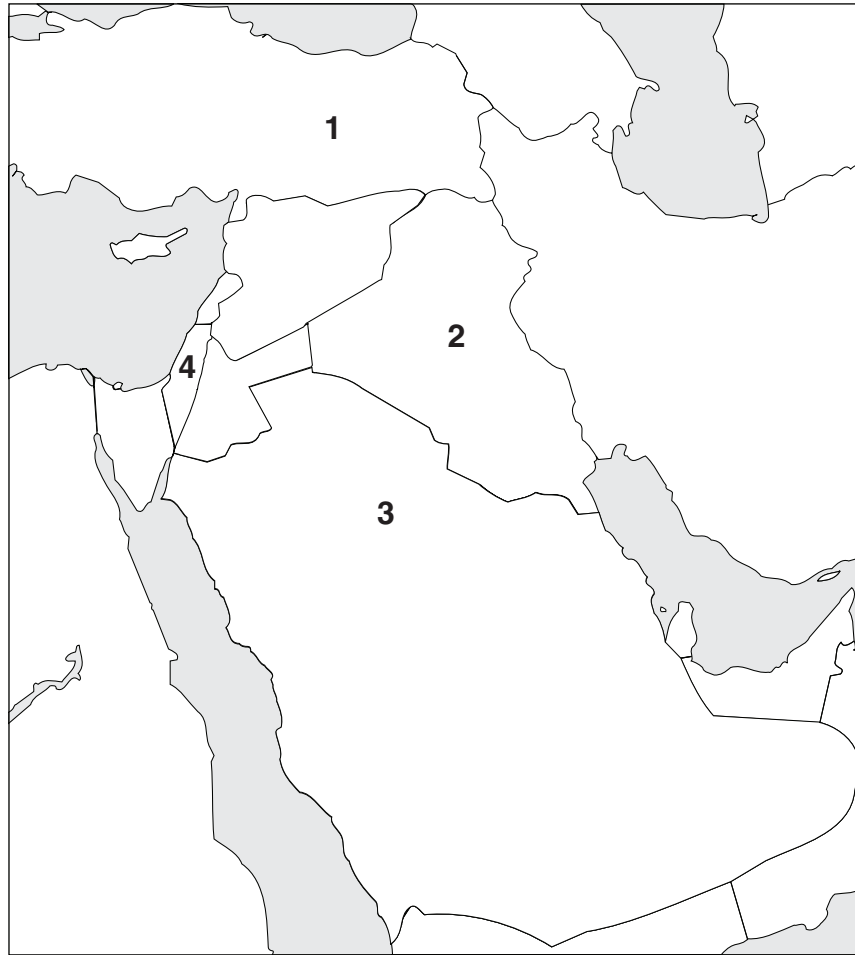
- A. He signed the Axis Treaty with Hitler's Germany.
- B. His army was victorious in its Abyssinian campaign.
- C. He successfully concluded an agreement with the Pope.
- D. His policies had made the Italian economy self-sufficient.

10. In what country did a civil war lead to the establishment of a fascist government in the 1930s?

- A. Italy
- B. Spain
- C. France
- D. Russia

11. What was the **main** objective of Stalin's first Five-Year Plan?
- A. to promote international socialism
 - B. to feed peasants in the new collective farms
 - C. to increase the country's heavy industrial output
 - D. to purge the Communist Party of any opposition to Stalin's rule
12. Which statement describes the period of imperial rule in India between 1919 and 1933?
- A. Gandhi led a march to the sea in support of British rule.
 - B. Nehru and Jinnah shared leadership of the Congress Party.
 - C. Guerrilla fighters attacked colonial forces throughout India.
 - D. Indian nationalists held strikes and boycotts in opposition to British rule.

Use the following map to answer question 13.



The Middle East

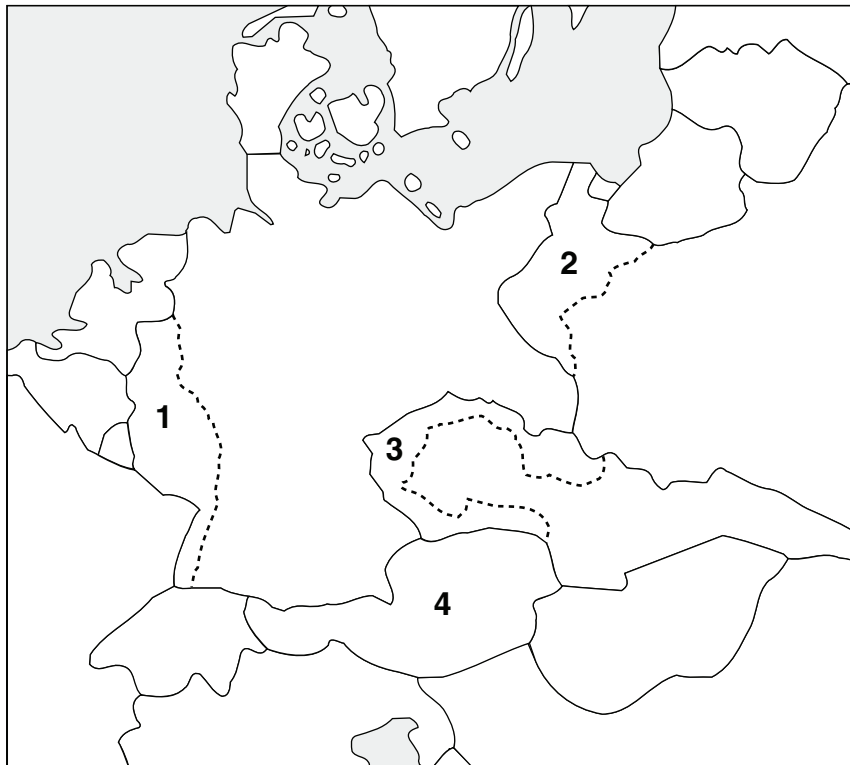
13. Which two numbered areas became mandates of Britain after the First World War?
- A. 1 and 2
 - B. 1 and 3
 - C. 2 and 4
 - D. 3 and 4

-
14. Which group benefited **most** from American tariffs of the 1920s?
- A. farmers
 - B. immigrants
 - C. manufacturers
 - D. black Americans

15. Which of the following contributed to the beginning of the Great Depression in the U.S.A.?
- A. Protective tariff bills were cancelled.
 - B. Agricultural production was in decline.
 - C. Wages did not rise as quickly as profits.
 - D. Manufacturers could not fill the demand for products.
16. With which American policy was the Dawes Plan of 1924 inconsistent?
- A. free trade
 - B. neutrality
 - C. isolationism
 - D. open immigration
17. What was the impact of the Japanese Greater East Asia Co-Prosperity Sphere?
- A. It exploited the resources of East Asian countries.
 - B. It established trade barriers between member states.
 - C. It promoted the independence of Indo-China and Korea.
 - D. It reduced the Japanese sphere of influence in East Asia.
18. Why was Hitler able to successfully remilitarize the Rhineland?
- A. People in the Rhineland voted to rejoin Germany.
 - B. Italian troops supported the German reoccupation.
 - C. Britain and France did not oppose Germany's action.
 - D. The German army was much larger than the French army.

19. Which of the following social policies was introduced by Roosevelt?
- A. equal pay for women
 - B. desegregation of schools
 - C. health care for all Americans
 - D. government pensions for the elderly
20. Which of the following is an example of appeasement?
- A. the Stresa Front
 - B. the Tripartite Pact
 - C. the Rome-Berlin Axis
 - D. the Anglo-German Naval Agreement

Use the following map to answer question 21.



21. What is the correct order of German expansion?
- A. 1, 2, 4, 3
 - B. 1, 4, 3, 2
 - C. 3, 1, 4, 2
 - D. 4, 3, 2, 1

THIS PAGE INTENTIONALLY BLANK

22. Which of the following is an accurate statement about the Battle of Britain?

- A. British radar provided a strong defense.
- B. The German invasion fleet was intercepted.
- C. American armed forces helped to save Britain.
- D. The Royal Air Force eliminated the German Air Force.

23. What was the turning point of the Second World War in Europe?

- A. the Battle of Kursk
- B. the Battle of Moscow
- C. the Battle of the Bulge
- D. the Battle of Stalingrad

Use the following documents to answer questions 24 to 28.

DOCUMENT 1



Poster from Texaco Oil (1943)

DOCUMENT 2

My fellow Americans. The sudden criminal attacks perpetrated by the Japanese in the Pacific provide the climax of a decade of international immorality.

Powerful and resourceful gangsters have banded together to make war upon the whole human race. Their challenge has now been flung at the United States of America. The Japanese have treacherously violated the long-standing peace between us. Many American soldiers and sailors have been killed by enemy action. American ships have been sunk; American airplanes have been destroyed.

President Roosevelt
Radio Address (December 9, 1941)

DOCUMENT 3



Joe Rosenthal, *Time, Great Images of the 20th Century* (1999)

Raising an American flag on the Japanese Island of Iwo Jima (1945).

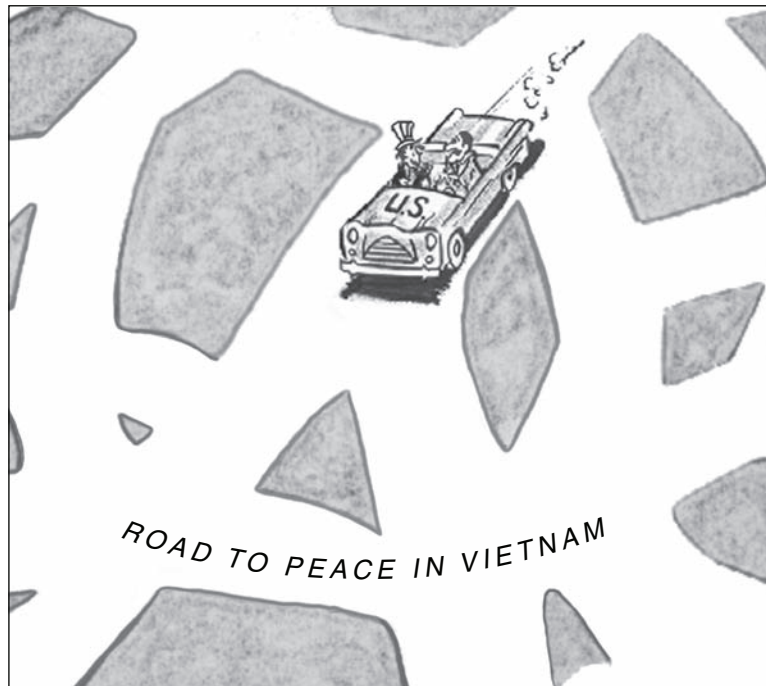
24. Why would an historian consider Document 2 to be reliable?
- A. It is an unbiased account of events.
 - B. It is a secondary source from American radio.
 - C. It was spoken by an important participant in the events.
 - D. It explains the Japanese motives for attacking Pearl Harbor.
25. How do Documents 2 and 3 corroborate each other?
- A. They show American victories.
 - B. They show the extent of Japanese losses.
 - C. They are intended to increase American morale.
 - D. They illustrate the importance of the wartime economy.
26. What is the intended message of Document 1?
- A. Citizens should boycott Texaco Oil.
 - B. People need a break to be more productive.
 - C. Texaco will benefit from people working hard.
 - D. Civilians can help defeat Japan by working hard.
27. Which phrase from Document 2 shows the **least** bias?
- A. “the sudden criminal attacks”
 - B. “American ships have been sunk”
 - C. “powerful and resourceful gangsters”
 - D. “Japanese have treacherously violated”
28. How is Document 3 an example of **effective** wartime propaganda?
- A. It illustrates the devastation of nuclear war.
 - B. It uses the planting of the flag to symbolize victory.
 - C. It demonstrates the Japanese determination to fight to the death.
 - D. It shows a multiracial group of soldiers achieving a common goal.

29. Which agreement reached at the Yalta Conference of 1945 was realized?
- A. The Second Front was opened.
 - B. Reparations were collected from Germany.
 - C. The Soviet Union joined the war against Japan.
 - D. Democratic elections were held in all European states.
30. Which nation was a Soviet satellite state during the Cold War?
- A. Israel
 - B. China
 - C. Yugoslavia
 - D. Czechoslovakia
31. An attack on what country led to the Suez Crisis of 1956?
- A. Syria
 - B. Israel
 - C. Egypt
 - D. Jordan
32. What contributed to the Sino-Soviet Split?
- A. the policy of peaceful co-existence
 - B. the signing of the Geneva Agreement
 - C. the UN's refusal to recognize communist China
 - D. the formation of the South East Asia Treaty Organization
33. Which nation was defeated at the Battle of Dien Bien Phu in 1954?
- A. France
 - B. Vietnam
 - C. the U.S.A.
 - D. the U.S.S.R.

34. Which nation refused to join the European Economic Community when it was created in 1957?
- A. Italy
 - B. France
 - C. Britain
 - D. West Germany
35. Which is a statement of **fact** rather than opinion about the Cuban Missile Crisis?
- A. Kennedy's decision to quarantine Cuba was justified.
 - B. The U.S.S.R. was beginning to place nuclear missiles in Cuba.
 - C. An American invasion of Cuba was a better solution to the crisis.
 - D. Khrushchev's withdrawal of the missiles was a sign of weakness.
36. Which of the following is an accurate statement about the nuclear arms race?
- A. Citizens demonstrated against nuclear weapons.
 - B. Arms reduction treaties eliminated nuclear weapons.
 - C. Deterrence limited the production of nuclear weapons.
 - D. Only the U.S.A. and the U.S.S.R. possessed nuclear weapons.
37. Who was imprisoned for opposing the Apartheid Laws?
- A. Malcom X
 - B. F.W. de Klerk
 - C. Nelson Mandela
 - D. Martin Luther King
38. Which pair of nations holds veto power in the UN Security Council?
- A. the U.S.A. and Italy
 - B. France and the U.S.A.
 - C. the U.S.S.R. and Japan
 - D. Germany and the U.S.S.R.

39. Which decision by Khrushchev contradicted his policy of de-Stalinization?
- A. increase in aid to the satellite states
 - B. use of force to put down the Hungarian Revolt
 - C. expansion of Soviet military control in Yugoslavia
 - D. increase in the number of prison camps in the gulag

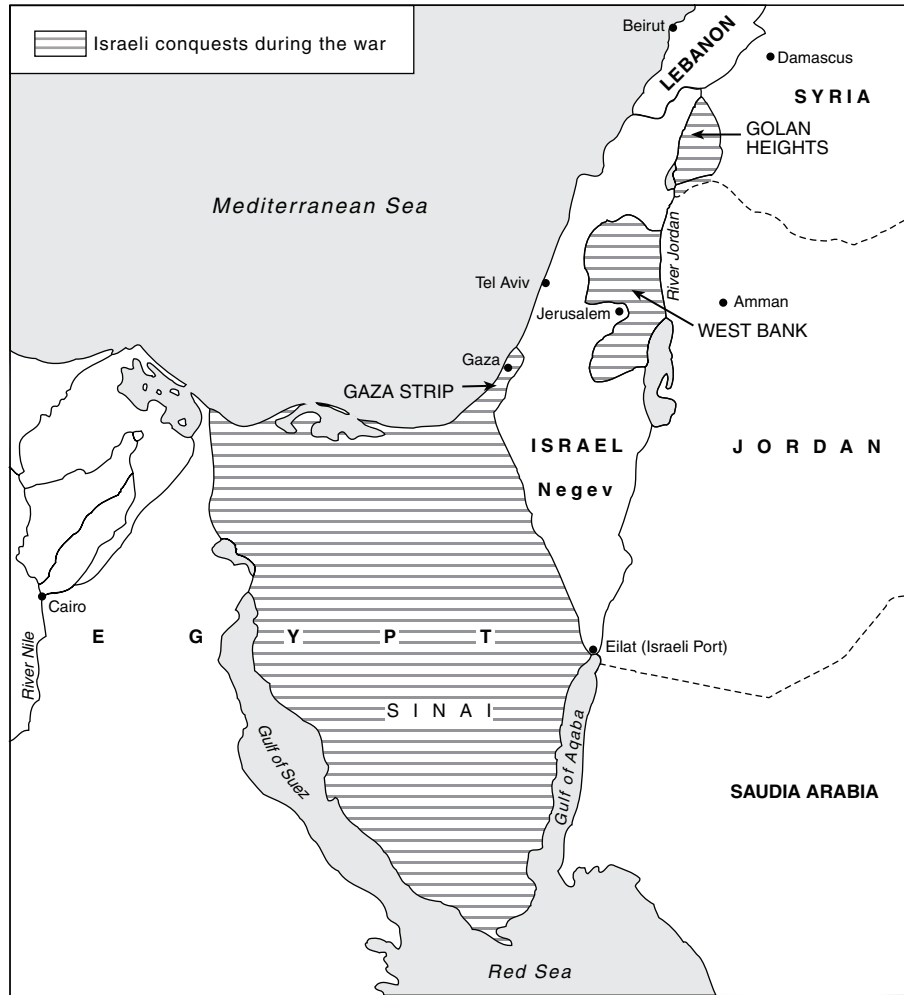
Use the following cartoon to answer question 40.



Eddie Germano, *Brockton Enterprise* (1966)

40. What is the cartoon's message about the road to peace?
- A. It is complicated.
 - B. It is close to being achieved.
 - C. It can only be arrived at through Vietnamization.
 - D. It can be achieved with American manufacturing.

Use the following map to answer question 41.



41. Which Middle East conflict resulted in the conquests shown on the map?
- A. 1948 War of Independence
 - B. 1956 Suez Crisis
 - C. 1967 Six-Day War
 - D. 1973 Yom Kippur War

-
42. The Camp David Accord led to peace between what two nations?
- A. Syria and Egypt
 - B. Egypt and Israel
 - C. Lebanon and Syria
 - D. Israel and Lebanon

43. What was a result of the Ayatollah Khomeini's takeover of Iran in 1979?
- A. the inclusion of Iran in CENTO
 - B. the formation of an alliance with Iraq
 - C. the expansion of American influence in Iran
 - D. the establishment of an Islamic fundamentalist state

Use the following list to answer question 44.

- | |
|--|
| <ol style="list-style-type: none">1. Helsinki Accords2. Nixon's visit to China3. Ronald Reagan's re-election4. Soviet invasion of Afghanistan5. Nuclear Non-Proliferation Treaty |
|--|

44. Which of the following are examples of détente?
- A. 1, 2, 5
 - B. 1, 3, 5
 - C. 2, 3, 4
 - D. 2, 4, 5

Use the following quotation to answer question 45.


<p>What we need is Star Peace and not Star Wars.</p>
--

<p>Mikhail Gorbachev</p>

45. What was Gorbachev criticizing in this quotation?
- A. SALT I
 - B. Containment
 - C. Nuclear Test Ban Treaty
 - D. Strategic Defense Initiative

46. Which of the following protest movements failed to achieve its objective?
- A. the Solidarity movement in Poland
 - B. the Vietnam War protests in the U.S.A.
 - C. the Tiananmen Square protest in China
 - D. the reunification movement in Germany
47. Which of the following is an accurate statement about China under the leadership of Deng Xiaoping?
- A. China became increasingly capitalist.
 - B. China rejected membership in the UN.
 - C. China recognized Taiwan's independence.
 - D. China achieved significant democratic reform.
48. Which of the following is an accurate statement about Gorbachev?
- A. He encouraged economic restructuring within the Soviet Union.
 - B. His policy of glasnost increased press censorship in the Soviet Union.
 - C. He brought the former republics of the Soviet Union into an economic union.
 - D. He used military force to maintain Soviet control over Eastern Bloc countries.

Use the following cartoon to answer question 49.



N. Belevtsev, Pravda (October 24, 1991)

49. What is the message of the cartoon?

- A. Soviet naval forces have been under-funded.
- B. There are no more communist countries in the world.
- C. Western nations have boycotted the Moscow Olympics.
- D. Former Soviet Bloc countries have abandoned communism.

50. Which of the following is an example of a cause-and-effect relationship?

- A. break-up of the U.S.S.R → peace in the Middle East
- B. reunification of Germany → fall of the Berlin Wall
- C. attempted coup against Gorbachev → Perestroika reforms
- D. rise of nationalism in eastern Europe → civil war in Yugoslavia

51. What did the OPEC crisis of the 1970s have in common with the Gulf War of 1991?

- A. opposition to Israeli expansion
- B. alarm about the future of Kuwait
- C. growth of Islamic fundamentalism
- D. concern over the control of oil supplies

You have **Examination Booklet Form A**. In the box above #1 on your **Answer Sheet**, ensure you filled in the bubble as follows.

Exam Booklet Form/ Cahier d'examen	A	B	C	D	E	F	G	H
	<input checked="" type="radio"/>	<input type="radio"/>	<input type="radio"/>	<input type="radio"/>	<input type="radio"/>	<input type="radio"/>	<input type="radio"/>	<input type="radio"/>

**This is the end of the multiple-choice section.
Answer the remaining questions in the Response Booklet.**

PART B: WRITTEN RESPONSE

Value: 16 marks

Suggested Time: 30 minutes

INSTRUCTIONS:

- Read the written-response questions on page 21 and 22.
- Select **one** question from SECTION 1 and respond **to that** question in the space provided in the **Response Booklet**.

AND

- Select **one** question from SECTION 2 and respond **to that** question in the space provided in the **Response Booklet**.
- You may not need all of the space provided in the Response Booklet. Use the **Organization and Planning** page to plan your work. Write in **ink**.

NOTE: Only one written response from each section will be marked.

SECTION 1: Indicate your choice by a check mark in the **Response Booklet**. If you write on more than one topic, only the **first** will be marked.

1. Describe how Stalin transformed the peasant-based Soviet economy into a modern industrial state between 1928 and 1941.

(8 marks)

OR

2. Describe the use of technology in the Second World War.

(8 marks)

WRITING ON
THIS PAGE
WILL NOT
BE MARKED.

SECTION 2: Indicate your choice by a check mark in the **Response Booklet**. If you write on more than one topic, only the **first** will be marked.

3. To what extent were African-American civil rights achieved without violence? **(8 marks)**

OR

4. To what extent did economic factors cause the collapse of communism in the U.S.S.R.? **(8 marks)**

WRITING ON
THIS PAGE
WILL NOT
BE MARKED.

PART C: ESSAY

Value: 25 marks

Suggested Time: 45 minutes

INSTRUCTIONS: Choose **one** of the following two questions and write a well constructed, multi-paragraph essay on the pages titled “Essay” in the **Response Booklet**. Use the **Organization and Planning** page to plan your work. Write in **ink**.

A **good** answer **must**:

- develop a thesis, and
- use examples from throughout the history of the period 1917 to 1991.

Indicate your choice by placing a check mark in one box in **Instruction 4** on the front cover of the **Response Booklet**.

5. To what extent was popular discontent a factor in the rise of totalitarian governments during the period 1917 to 1991?

OR

6. To what extent have nationalist movements been successful in the period 1917 to 1991?

WRITING ON
THIS PAGE
WILL NOT
BE MARKED.

END OF EXAMINATION

MINISTRY USE ONLY

Place Personal Education Number (PEN) here.

Course Code = HI 12
AUGUST 2006

Exam Booklet Form/ Cahier d'examen A B C D E F G H

Student Instructions

1. Place your Personal Education Number (PEN) label at the top of this Booklet **AND** fill in the bubble (Form A, B, C, D, E, F, G or H) that corresponds to the letter on your Examination Booklet.
2. Use a pencil to fill in bubbles when answering questions on your Answer Sheet.
3. Use a blue- or black-ink pen when answering written-response questions in this Booklet.
4. When you have made your selection, indicate in the space below which questions you have selected:
 Section 1: 1 2
 Section 2: 3 4
 Essay Questions: 5 6
5. Read the Examination Rules on the back of this Booklet.

MINISTRY USE ONLY


Question								
1	2							
<input type="checkbox"/>	<input type="checkbox"/>							
0	1	2	3	4	5	6	NR	
<input type="checkbox"/>	<input type="checkbox"/>	<input type="checkbox"/>	<input type="checkbox"/>	<input type="checkbox"/>	<input type="checkbox"/>	<input type="checkbox"/>	<input type="checkbox"/>	<input type="checkbox"/>
Question								
3	4							
<input type="checkbox"/>	<input type="checkbox"/>							
0	1	2	3	4	5	6	NR	
<input type="checkbox"/>	<input type="checkbox"/>	<input type="checkbox"/>	<input type="checkbox"/>	<input type="checkbox"/>	<input type="checkbox"/>	<input type="checkbox"/>	<input type="checkbox"/>	<input type="checkbox"/>
Question								
5	6							
<input type="checkbox"/>	<input type="checkbox"/>							
Marker 1								
0	1	2	3	4	5	6	NR	
<input type="checkbox"/>	<input type="checkbox"/>	<input type="checkbox"/>	<input type="checkbox"/>	<input type="checkbox"/>	<input type="checkbox"/>	<input type="checkbox"/>	<input type="checkbox"/>	<input type="checkbox"/>
Marker 2								
0	1	2	3	4	5	6	NR	
<input type="checkbox"/>	<input type="checkbox"/>	<input type="checkbox"/>	<input type="checkbox"/>	<input type="checkbox"/>	<input type="checkbox"/>	<input type="checkbox"/>	<input type="checkbox"/>	<input type="checkbox"/>



MINISTRY USE ONLY



Place Personal Education Number (PEN) here.



Course Code = HI 12

History 12

AUGUST 2006

Response Booklet

Organization and Planning

Use this space to plan your ideas before writing in the **Response Booklet**.

WRITING ON
THIS PAGE
WILL NOT
BE MARKED.

Organization and Planning

Use this space to plan your ideas before writing in the **Response Booklet**.

WRITING ON
THIS PAGE
WILL NOT
BE MARKED.

Organization and Planning

Use this space to plan your ideas before writing in the **Response Booklet**.

WRITING ON
THIS PAGE
WILL NOT
BE MARKED.

Examination Rules

1. The time allotted for this examination is two hours.
You may, however, take up to 60 minutes of additional time to finish.
2. Answers entered in the Examination Booklet will not be marked.
3. Cheating on an examination will result in a mark of zero. The Ministry of Education considers cheating to have occurred if a student breaks any of the following rules:
 - Candidates must not give or receive assistance of any kind in answering an examination question during an examination, including allowing one's paper to be viewed by others or copying answers from another student's paper.
 - Candidates must not possess any book, paper or item that might assist in writing an examination, including a dictionary or piece of electronic equipment, that is not specifically authorized for the examination by ministry policy.
 - Candidates must immediately follow the invigilator's order to stop writing at the end of the examination time and must not alter an Examination Booklet, Response Booklet or Answer Sheet after the invigilator has asked students to hand in examination papers.
 - Candidates must not communicate with another student during the examination.
 - Candidates must not remove any piece of the examination materials from the examination room, including work pages.
 - Candidates must not take or knowingly use any secure examination materials prior to the examination session.
4. The use of inappropriate language or content may result in a mark of zero being awarded.
5. Upon completion of the examination, return all examination materials to the supervising invigilator.