

JANUARY 1999

PROVINCIAL EXAMINATION

MINISTRY OF EDUCATION

CHEMISTRY 12

GENERAL INSTRUCTIONS

1. Insert the stickers with your Student I.D. Number (PEN) in the allotted spaces above and on the **back** cover of this booklet. **Under no circumstance is your name or identification, other than your Student I.D. Number, to appear on this booklet.**
2. Ensure that in addition to this examination booklet, you have a **Data Booklet** and an **Examination Response Form**. Follow the directions on the front of the Response Form.
3. **Disqualification** from the examination will result if you bring books, paper, notes or unauthorized electronic devices into the examination room.
4. All multiple-choice answers must be entered on the Response Form using an **HB pencil**. Multiple-choice answers entered in this examination booklet will **not** be marked.
5. For each of the written-response questions, write your answer in the space provided in this booklet.
6. When instructed to open this booklet, **check the numbering of the pages** to ensure that they are numbered in sequence from page one to the last page, which is identified by

END OF EXAMINATION.

7. At the end of the examination, place your Response Form inside the front cover of this booklet and return the booklet and your Response Form to the supervisor.

THIS PAGE INTENTIONALLY BLANK

CHEMISTRY 12 PROVINCIAL EXAMINATION

	Value	Suggested Time
1. This examination consists of two parts:		
PART A: 48 multiple-choice questions	48	70
PART B: 9 written-response questions	32	50
	Total: 80 marks	120 minutes

2. Aside from an approved calculator, electronic devices, including dictionaries and pagers, are **not** permitted in the examination room.

3. The following tables can be found in the separate **Data Booklet**.

- Periodic Table of the Elements
- Atomic Masses of the Elements
- Names, Formulae, and Charges of Some Common Ions
- Solubility of Common Compounds in Water
- Solubility Product Constants at 25°C
- Relative Strengths of Brønsted-Lowry Acids and Bases
- Acid-Base Indicators
- Standard Reduction Potentials of Half-cells

No other reference materials or tables are allowed.

4. **A calculator is essential for the Chemistry 12 Provincial Examination.** The calculator must be a hand-held device designed primarily for mathematical computations involving logarithmic and trigonometric functions and may also include graphing functions. Computers, calculators with a QWERTY keyboard, and electronic writing pads will not be allowed. Students must not bring any external support devices such as manuals, printed or electronic cards, printers, memory expansion chips, or external keyboards. Students may have more than one calculator available during the examination, but calculators may not be shared. Communication between calculators is prohibited and calculators must not have the ability to either transmit or receive electronic signals. In addition to an approved calculator, students will be allowed to use rulers, compasses, and protractors during the examination.

5. The time allotted for this examination is **two hours**.

THIS PAGE INTENTIONALLY BLANK

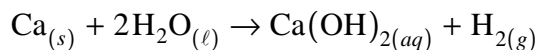
PART A: MULTIPLE CHOICE

Value: 48 marks

Suggested Time: 70 minutes

INSTRUCTIONS: For each question, select the **best** answer and record your choice on the Response Form provided. Using an HB pencil, completely fill in the circle that has the letter corresponding to your answer.

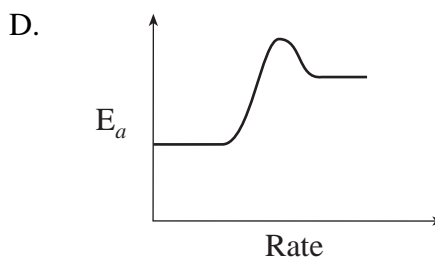
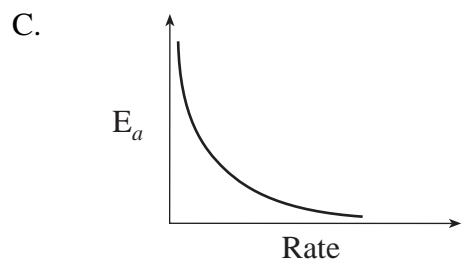
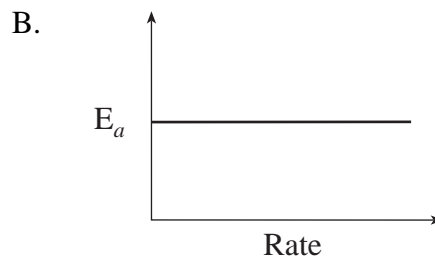
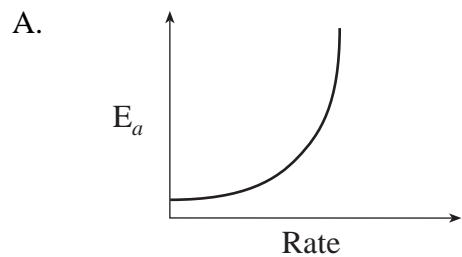
1. Consider the reaction:



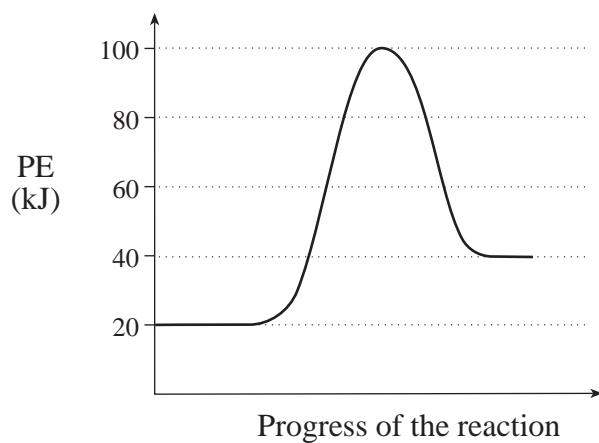
At a certain temperature, 2.50 g Ca reacts completely in 30.0 seconds.
The rate of consumption of Ca is

- A. 0.00208 mol/min
 - B. 0.0833 mol/min
 - C. 0.125 mol/min
 - D. 5.00 mol/min
2. The minimum amount of energy required to overcome the energy barrier in a chemical reaction is the
- A. heat of reaction.
 - B. activation energy.
 - C. KE of the reactants.
 - D. enthalpy of the products.
3. An activated complex is a chemical species that is
- A. stable and has low PE.
 - B. stable and has high PE.
 - C. unstable and has low PE.
 - D. unstable and has high PE.

4. A certain reaction is able to proceed by various mechanisms. Each mechanism has a different E_a and results in a different overall rate. Which of the following best describes the relationship between the E_a values and the rates?



5. Consider the following PE diagram:



The forward reaction can be described as

	ΔH (kJ)	ACTIVATION ENERGY (kJ)	TYPE OF REACTION
A.	+20	80	endothermic
B.	+20	60	exothermic
C.	-20	80	exothermic
D.	-20	100	endothermic

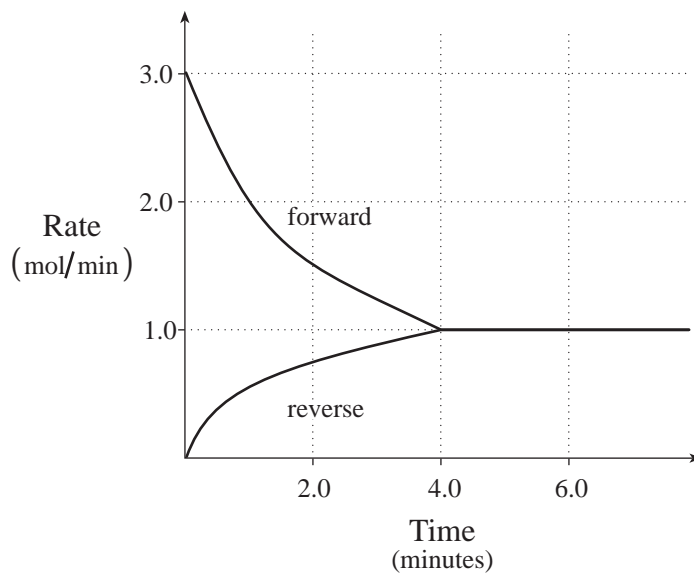
6. Consider the following reaction mechanism:

Step 1	$2\text{NO} + \text{H}_2 \rightarrow \text{N}_2 + \text{H}_2\text{O}_2$
Step 2	$\text{H}_2\text{O}_2 + \text{H}_2 \rightarrow 2\text{H}_2\text{O}$

In this reaction, H_2 is a

- A. product.
- B. catalyst.
- C. reactant.
- D. reaction intermediate.

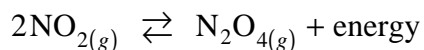
7. Consider the following graph:



When equilibrium is reached, the rate of the forward reaction is

- A. 0.00 mol/min
- B. 0.25 mol/min
- C. 1.0 mol/min
- D. 3.0 mol/min

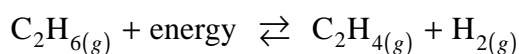
8. Consider the following equilibrium:



The equilibrium will shift to the left as a result of

- A. adding a catalyst.
- B. increasing the volume.
- C. removing some N_2O_4 .
- D. decreasing the temperature.

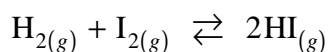
9. Ethene, C_2H_4 , can be produced in the following industrial system:



The conditions that are necessary to maximize the equilibrium yield of C_2H_4 are

- A. low temperature and low pressure.
- B. low temperature and high pressure.
- C. high temperature and low pressure.
- D. high temperature and high pressure.

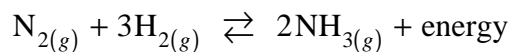
10. Consider the following equilibrium:



The volume of the equilibrium system is increased and a new equilibrium is established. Compared to the rates in the original equilibrium, which of the following describes the rates of the forward and reverse reactions in the new equilibrium?

	FORWARD RATE	REVERSE RATE
A.	decreased	decreased
B.	increased	increased
C.	decreased	increased
D.	remained constant	remained constant

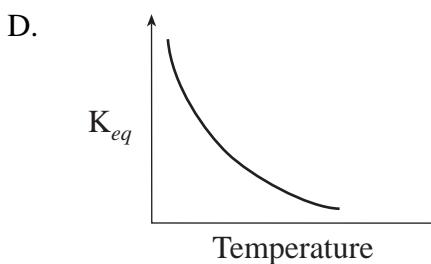
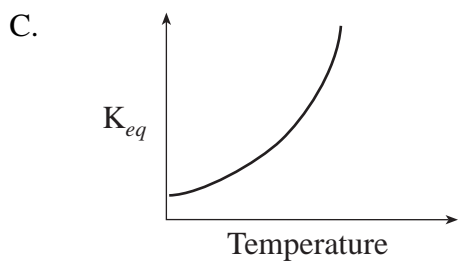
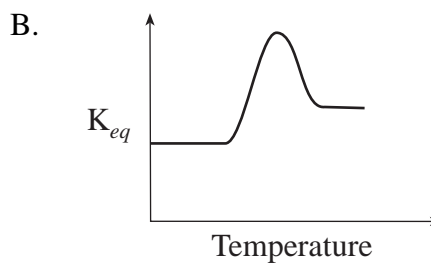
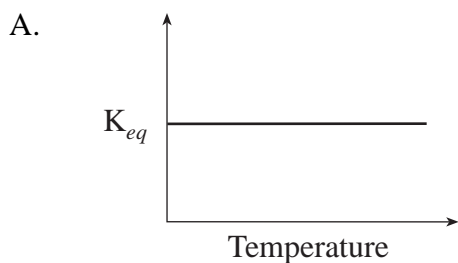
11. Consider the following equilibrium:



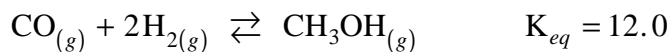
Certain conditions provide less than 10% yield of NH_3 at equilibrium. Which of the following describes this equilibrium?

	K_{eq}	EQUILIBRIUM POSITION
A.	large	favours products
B.	small	favours products
C.	large	favours reactants
D.	small	favours reactants

12. Which of the following best describes the relationship between K_{eq} and temperature for an endothermic reaction?



13. Consider the following equilibrium:



At equilibrium, a 1.00 L flask contains 0.020 mol CO and 0.35 mol H₂.
What is the concentration of CH₃OH at equilibrium?

- A. 2.0×10^{-4} mol/L
- B. 5.8×10^{-4} mol/L
- C. 2.9×10^{-2} mol/L
- D. 8.4×10^{-2} mol/L

14. Which of the following units could be used to describe solubility?

- A. g/s
- B. g/L
- C. M/L
- D. mol/s

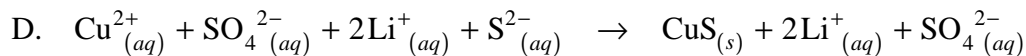
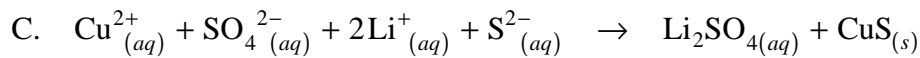
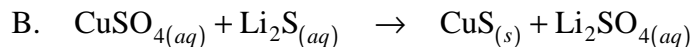
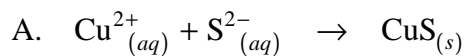
15. Consider the following anions:

	ANION
I.	10.0 mL of 0.20 M Cl ⁻
II.	10.0 mL of 0.20 M OH ⁻
III.	10.0 mL of 0.20 M SO ₃ ²⁻

When 10.0 mL of 0.20 M Pb(NO₃)₂ are added to each of the above, precipitates form in

- A. I and II only.
- B. I and III only.
- C. II and III only.
- D. I, II and III.

16. When equal volumes of 0.20 M CuSO_4 and 0.20 M Li_2S are combined, the complete ionic equation is



17. The K_{sp} expression for a saturated solution of Ag_2CO_3 is

A. $K_{sp} = [\text{Ag}_2^+][\text{CO}_3^{2-}]$

B. $K_{sp} = [\text{Ag}^+]^2[\text{CO}_3^{2-}]$

C. $K_{sp} = [2\text{Ag}^+][\text{CO}_3^{2-}]$

D. $K_{sp} = [2\text{Ag}^+]^2[\text{CO}_3^{2-}]$

18. The solubility of FeF_2 is 8.4×10^{-3} M. The K_{sp} value is

A. 5.9×10^{-7}

B. 2.4×10^{-6}

C. 7.1×10^{-5}

D. 8.4×10^{-3}

19. If the Trial Ion Product for AgBrO_3 is calculated to be 1.0×10^{-7} , then

A. a precipitate forms because the Trial Ion Product $> K_{sp}$

B. a precipitate forms because the Trial Ion Product $< K_{sp}$

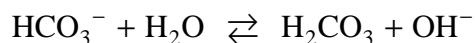
C. no precipitate forms because the Trial Ion Product $> K_{sp}$

D. no precipitate forms because the Trial Ion Product $< K_{sp}$

20. The least soluble salt in water is

- A. CaS
- B. CaSO₄
- C. CaC₂O₄
- D. Ca(NO₃)₂

21. Consider the following acid-base equilibrium:



In the reaction above, the Brønsted-Lowry acids are

- A. H₂O and OH⁻
- B. HCO₃⁻ and OH⁻
- C. H₂O and H₂CO₃
- D. HCO₃⁻ and H₂CO₃

22. Consider the following solubility equilibrium:



A compound that could be added to cause this equilibrium to shift to the right is

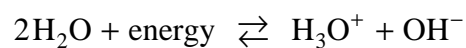
- A. Na₂O
- B. NH₄Cl
- C. Sr(OH)₂
- D. Mg(OH)₂

23. The solution with the lowest electrical conductivity is

- A. 0.10 M H₂S
- B. 0.10 M HNO₂
- C. 0.10 M H₂SO₃
- D. 0.10 M NH₄Cl

24. The solution with the lowest pH is
- A. 1.0 M HF
 - B. 1.0 M HCN
 - C. 1.0 M HCOOH
 - D. 1.0 M CH₃COOH
25. As the [H₃O⁺] in a solution decreases, the [OH⁻]
- A. increases and the pH increases.
 - B. increases and the pH decreases.
 - C. decreases and the pH increases.
 - D. decreases and the pH decreases.
26. The value of pK_w at 25°C is
- A. 1.0 × 10⁻¹⁴
 - B. 1.0 × 10⁻⁷
 - C. 7.00
 - D. 14.00

27. Consider the following equilibrium:

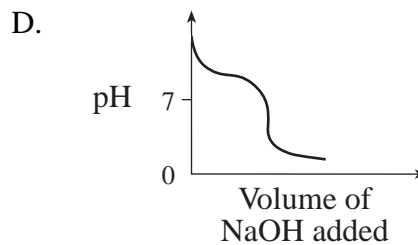
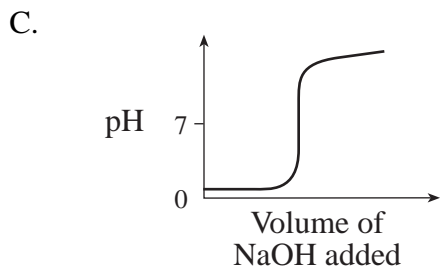
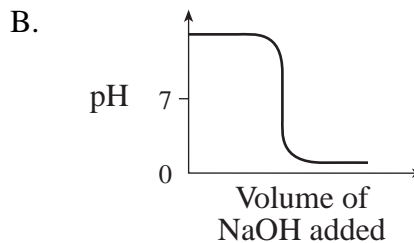
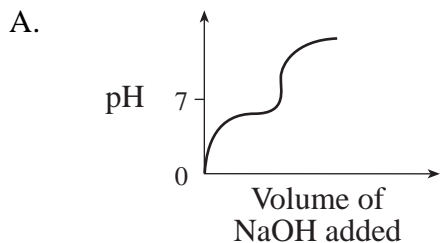


In pure water at a temperature of 50°C,

- A. pH < 7
- B. pH + pOH = 14
- C. K_w = 1.0 × 10⁻¹⁴
- D. [OH⁻] < 1.0 × 10⁻⁷

28. What is the pOH of 2.5 M NaOH?
- A. -0.40
 - B. 0.0032
 - C. 0.40
 - D. 13.60
29. A 0.010 M acid solution has a pH of 2.00. The acid could be
- A. HNO_3
 - B. H_2SO_3
 - C. HCOOH
 - D. CH_3COOH
30. Which of the following salts dissolves to produce a basic aqueous solution?
- A. LiF
 - B. KClO_4
 - C. NaHSO_3
 - D. NH_4NO_3

31. Which titration curve represents the titration of HCl with NaOH?



32. A buffer solution can be formed by dissolving equal moles of

- A. HF and NaF
- B. HCl and NaOH
- C. KBr and Na_3PO_4
- D. CH_3COOH and NaCl

33. Which of the following gases is a contributor to the formation of acid rain?

- A. H_2
- B. O_3
- C. SO_2
- D. NH_3

34. During a titration, an indicator is found to change colour when the $[\text{H}_3\text{O}^+] = 1 \times 10^{-6} \text{ M}$. Identify the indicator.
- A. methyl violet
 - B. alizarin yellow
 - C. phenolphthalein
 - D. chlorophenol red

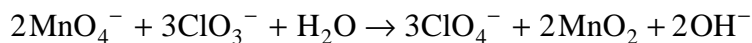
35. Consider the following:

I.	PO_4^{3-}
II.	HPO_4^{2-}
III.	H_2PO_4^-
IV.	H_3PO_4

The term amphiprotic can be used to describe

- A. I only.
 - B. II and III only.
 - C. I, II and III only.
 - D. II, III and IV only.
36. Calculate the $[\text{H}_3\text{O}^+]$ in a solution prepared by mixing 25.0 mL of 1.0 M HCl with 50.0 mL of 0.50 M KOH.
- A. 1.0 M
 - B. 0.50 M
 - C. 0.25 M
 - D. $1.0 \times 10^{-7} \text{ M}$

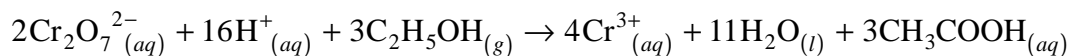
37. Consider the following redox reaction:



The reducing agent is

- A. H_2O
- B. ClO_3^-
- C. MnO_2
- D. MnO_4^-

38. Consider the following reaction that occurs in a breathalyzer:



Which atom undergoes an increase in oxidation number?

- A. carbon
- B. oxygen
- C. hydrogen
- D. chromium

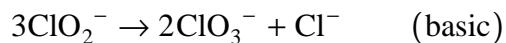
39. Which of the following is the strongest reducing agent?

- A. Al
- B. Cu
- C. Zn
- D. Mg

40. Which of the following reactions is spontaneous at standard conditions?

- A. $\text{Pb} + \text{Cu}^{2+} \rightarrow \text{Cu} + \text{Pb}^{2+}$
- B. $\text{H}_2 + \text{Mg}^{2+} \rightarrow \text{Mg} + 2\text{H}^+$
- C. $\text{Br}_2 + 2\text{Cl}^- \rightarrow \text{Cl}_2 + 2\text{Br}^-$
- D. $2\text{Ag} + \text{Cu}^{2+} \rightarrow \text{Cu} + 2\text{Ag}^+$

41. Consider the following redox reaction:



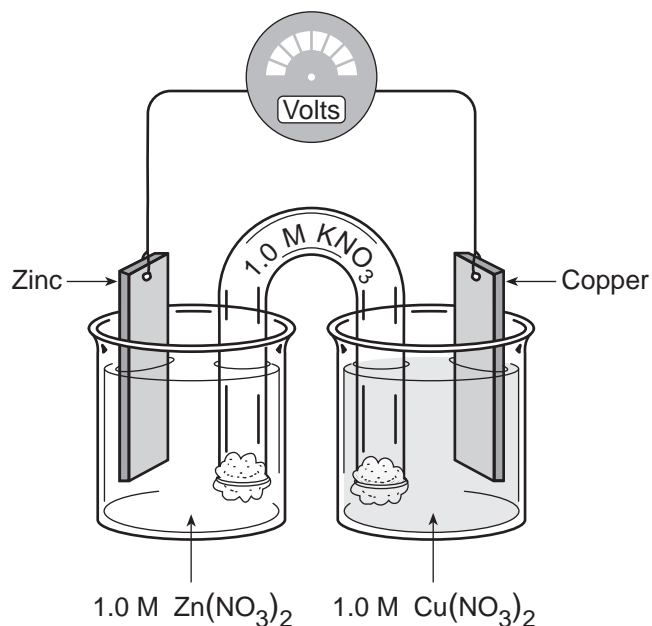
The reduction half-reaction that occurs is

- A. $\text{ClO}_2^- + 2\text{H}_2\text{O} + 4\text{e}^- \rightarrow \text{Cl}^- + 4\text{OH}^-$
- B. $\text{ClO}_2^- + 2\text{H}_2\text{O} \rightarrow \text{Cl}^- + 4\text{OH}^- + 4\text{e}^-$
- C. $\text{ClO}_2^- + 2\text{OH}^- + 2\text{e}^- \rightarrow \text{ClO}_3^- + \text{H}_2\text{O}$
- D. $\text{ClO}_2^- + 2\text{OH}^- \rightarrow \text{ClO}_3^- + \text{H}_2\text{O} + 2\text{e}^-$

42. Vanadium metal, V, reacts spontaneously with Cd^{2+} , but not with Ti^{2+} . Based on these results, the order of oxidizing agents, from strongest to weakest, is

- A. Cd^{2+} , V^{2+} , Ti^{2+}
- B. V^{2+} , Ti^{2+} , Cd^{2+}
- C. Ti^{2+} , Cd^{2+} , V^{2+}
- D. Ti^{2+} , V^{2+} , Cd^{2+}

43. Consider the following electrochemical cell:



In this operating electrochemical cell,

- A. electrons flow toward the Cu and the Cu^{2+} ions migrate toward the Zn.
- B. electrons flow toward the Cu and the Zn^{2+} ions migrate toward the Cu.
- C. electrons flow toward the Zn and the Cu^{2+} ions migrate toward the Zn.
- D. electrons flow toward the Zn and the Zn^{2+} ions migrate toward the Cu.

44. Which of the following affects the potentials of electrochemical cells?

I.	species used as oxidizing agent
II.	temperature
III.	concentration of reactants

- A. I and II only.
- B. II and III only.
- C. I and III only.
- D. I, II and III.

45. In the rusting of iron, the reduction reaction that occurs is
- A. $\text{Fe} \rightarrow \text{Fe}^{2+} + 2\text{e}^{-}$
 - B. $\text{Fe}^{2+} + 2\text{e}^{-} \rightarrow \text{Fe}$
 - C. $2\text{H}_2\text{O} \rightarrow \text{O}_2 + 4\text{H}^{+} + 4\text{e}^{-}$
 - D. $\text{O}_2 + 2\text{H}_2\text{O} + 4\text{e}^{-} \rightarrow 4\text{OH}^{-}$
46. During a cathodic protection, the sacrificial anode
- A. accepts electrons from the protected metal.
 - B. reacts spontaneously with the protected metal.
 - C. oxidizes more readily than the protected metal.
 - D. causes the protected metal to become an anode.
47. During the electrolysis of an aqueous solution of KI, what substance is formed at the cathode?
- A. iodine
 - B. oxygen
 - C. hydrogen
 - D. potassium
48. When electroplating an iron medallion with nickel,
- A. the medallion is an anode.
 - B. the cathode is pure nickel.
 - C. the solution contains Ni^{2+} .
 - D. the anode reaction is $\text{Ni}^{2+} + 2\text{e}^{-} \rightarrow \text{Ni}$

This is the end of the multiple-choice section.
Answer the remaining questions directly in this examination booklet.

PART B: WRITTEN RESPONSE

Value: 32 marks

Suggested Time: 50 minutes

INSTRUCTIONS: You will be expected to communicate your knowledge and understanding of chemical principles in a clear and logical manner.
Your steps and assumptions leading to a solution must be written in the spaces below the questions.
Answers must include units where appropriate and be given to the correct number of significant figures.
For questions involving calculation, full marks will NOT be given for providing only an answer.

1. Consider the following reaction mechanism:

Step 1	?
Step 2	$\text{H}_2 + \text{Cl} \rightarrow \text{HCl} + \text{H}$
Step 3	$\text{H} + \text{Cl}_2 \rightarrow \text{HCl} + \text{Cl}$
Step 4	$\text{Cl} + \text{Cl} \rightarrow \text{Cl}_2$
Overall	$\text{H}_2 + \text{Cl}_2 \rightarrow 2\text{HCl}$

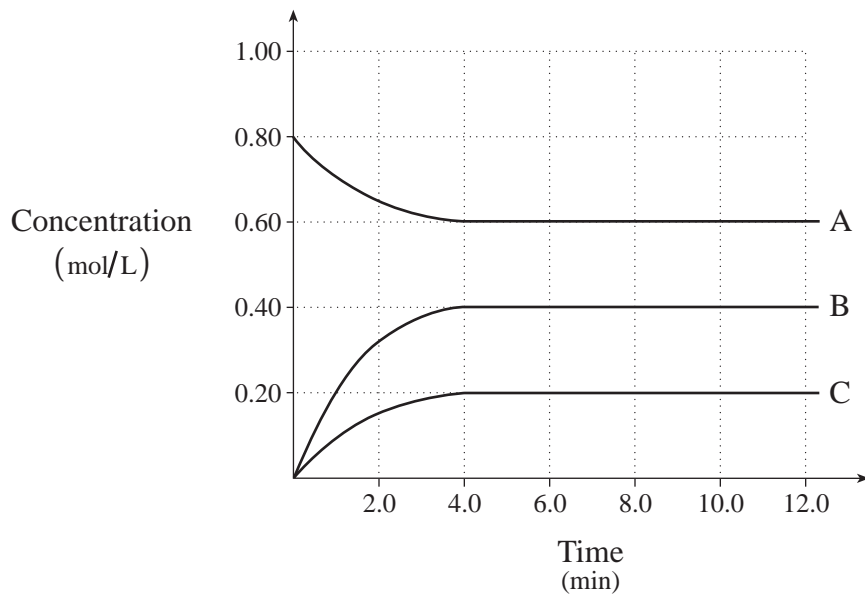
a) Write the equation for Step 1.

(2 marks)

b) Identify the reaction intermediate(s).

(1 mark)

2. Consider the following diagram for a chemical system containing three substances represented by A, B and C:



a) What feature of the graph indicates that the system reaches equilibrium? **(1 mark)**

b) Write a balanced equation for the equilibrium reaction. **(2 marks)**

c) Calculate K_{eq} at equilibrium. **(2 marks)**

3. In an experiment to determine the solubility of barium fluoride, 500.0 mL of the saturated solution was heated in an evaporating dish to remove the water. The evaporating dish and residue were heated two more times, to ensure all the water had been driven off.

I.	Volume of saturated solution of BaF ₂	500.0 mL
II.	Mass of evaporating dish	72.540 g
III.	Mass of evaporating dish and BaF ₂ after first heating	73.500 g
IV.	Mass of evaporating dish and BaF ₂ after second heating	72.855 g
V.	Mass of evaporating dish and BaF ₂ after third heating	72.855 g

Using the data above, calculate the K_{sp} for BaF₂.

(4 marks)

4. Consider the salt sodium oxalate, $\text{Na}_2\text{C}_2\text{O}_4$.

a) Write the dissociation equation for sodium oxalate.

(1 mark)

b) A 1.0 M solution of sodium oxalate turns pink when a few drops of the indicator phenolphthalein are added. Write a hydrolysis equation and explain why this salt causes the indicator to change colour.

(2 marks)

c) Calculate the equilibrium constant for the hydrolysis in b).

(1 mark)

5. Calculate the pH of 0.50 M H_3BO_3 .

(4 marks)

6. A 25.0 mL sample of $\text{Sr}(\text{OH})_2$ is titrated with a standardized solution of HCl to the equivalence point.

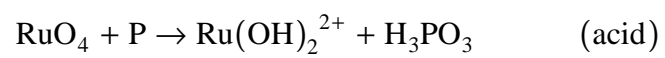
a) Write the formula equation for the neutralization. **(1 mark)**

b) Write the net ionic equation for the neutralization. **(1 mark)**

c) What is meant by the term “standardized” solution? **(1 mark)**

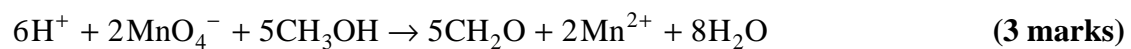
d) Define *equivalence point*. **(1 mark)**

7. Balance the following redox reaction in acidic solution:



(3 marks)

8. A technician tests the concentration of methanol, CH_3OH , in diluted windshield washer fluid using a redox titration. A 25.00 mL sample is titrated with 14.50 mL of 0.0200 M KMnO_4 . Determine the concentration of methanol in the sample given the following redox reaction:

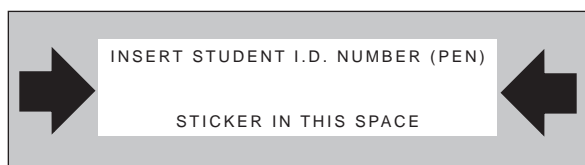


9. An electrolytic cell can be used to plate a copper penny with a silver coating. Sketch a diagram of the electrolytic cell. Label the cathode and show the direction of electron flow. **(2 marks)**

END OF EXAMINATION

THIS PAGE INTENTIONALLY BLANK





CHEMISTRY 12

January 1999

Course Code = CH

FOR OFFICE USE ONLY

CHEMISTRY 12

January 1999

Course Code = CH

Score for
Question 1:

1. _____
(3)

Score for
Question 8:

8. _____
(3)

Score for
Question 2:

2. _____
(5)

Score for
Question 9:

9. _____
(2)

Score for
Question 3:

3. _____
(4)

Score for
Question 4:

4. _____
(4)

Score for
Question 5:

5. _____
(4)

Score for
Question 6:

6. _____
(4)


Score for
Question 7:

7. _____
(3)

Data Booklet

CHEMISTRY 12

Work done in this booklet
will not be marked.



© Ministry of Education

Revised November 1994

CONTENTS

PAGE	TABLE
1	Periodic Table of the Elements
2	Atomic Masses of the Elements
3	Names, Formulae, and Charges of Some Common Ions
4	Solubility of Common Compounds in Water
5	Solubility Product Constants at 25°C
6	Relative Strengths of Brønsted-Lowry Acids and Bases
7	Acid-Base Indicators
8	Standard Reduction Potentials of Half-Cells

REFERENCE

D.R. Lide, *CRC Handbook of Chemistry and Physics*, 74 edition, CRC Press, Boca Raton, 1993.

PERIODIC TABLE OF THE ELEMENTS

1 H Hydrogen 1.0																18 He Helium 4.0	
3 Li Lithium 6.9	4 Be Beryllium 9.0											13 B Boron 10.8	14 C Carbon 12.0	15 N Nitrogen 14.0	16 O Oxygen 16.0	17 F Fluorine 19.0	10 Ne Neon 20.2
11 Na Sodium 23.0	12 Mg Magnesium 24.3											13 Al Aluminum 27.0	14 Si Silicon 28.1	15 P Phosphorus 31.0	16 S Sulphur 32.1	17 Cl Chlorine 35.5	18 Ar Argon 39.9
19 K Potassium 39.1	20 Ca Calcium 40.1	21 Sc Scandium 45.0	22 Ti Titanium 47.9	23 V Vanadium 50.9	24 Cr Chromium 52.0	25 Mn Manganese 54.9	26 Fe Iron 55.8	27 Co Cobalt 58.9	28 Ni Nickel 58.7	29 Cu Copper 63.5	30 Zn Zinc 65.4	31 Ga Gallium 69.7	32 Ge Germanium 72.6	33 As Arsenic 74.9	34 Se Selenium 79.0	35 Br Bromine 79.9	36 Kr Krypton 83.8
37 Rb Rubidium 85.5	38 Sr Strontium 87.6	39 Y Yttrium 88.9	40 Zr Zirconium 91.2	41 Nb Niobium 92.9	42 Mo Molybdenum 95.9	43 Tc Technetium (98)	44 Ru Ruthenium 101.1	45 Rh Rhodium 102.9	46 Pd Palladium 106.4	47 Ag Silver 107.9	48 Cd Cadmium 112.4	49 In Indium 114.8	50 Sn Tin 118.7	51 Sb Antimony 121.8	52 Te Tellurium 127.6	53 I Iodine 126.9	54 Xe Xenon 131.3
55 Cs Cesium 132.9	56 Ba Barium 137.3	57 La Lanthanum 138.9	72 Hf Hafnium 178.5	73 Ta Tantalum 180.9	74 W Tungsten 183.8	75 Re Rhenium 186.2	76 Os Osmium 190.2	77 Ir Iridium 192.2	78 Pt Platinum 195.1	79 Au Gold 197.0	80 Hg Mercury 200.6	81 Tl Thallium 204.4	82 Pb Lead 207.2	83 Bi Bismuth 209.0	84 Po Polonium (209)	85 At Astatine (210)	86 Rn Radon (222)
87 Fr Francium (223)	88 Ra Radium (226)	89 Ac Actinium (227)	104 Rf Rutherfordium (261)	105 Ha Hahnium (262)	106 Sg Seaborgium (263)	107 Uns Unnilseptium (262)	108 Uno Unniloctium (265)	109 Une Unnilennium (266)									

14	— Atomic number
Si	— Symbol
Silicon	— Name
28.1	— Atomic mass

Based on mass of C¹² at 12.00.

Values in parentheses are the masses of the most stable or best known isotopes for elements which do not occur naturally.

58 Ce Cerium 140.1	59 Pr Praseodymium 140.9	60 Nd Neodymium 144.2	61 Pm Promethium (145)	62 Sm Samarium 150.4	63 Eu Europium 152.0	64 Gd Gadolinium 157.3	65 Tb Terbium 158.9	66 Dy Dysprosium 162.5	67 Ho Holmium 164.9	68 Er Erbium 167.3	69 Tm Thulium 168.9	70 Yb Ytterbium 173.0	71 Lu Lutetium 175.0
90 Th Thorium 232.0	91 Pa Protactinium 231.0	92 U Uranium 238.0	93 Np Neptunium (237)	94 Pu Plutonium (244)	95 Am Americium (243)	96 Cm Curium (247)	97 Bk Berkelium (247)	98 Cf Californium (251)	99 Es Einsteinium (252)	100 Fm Fermium (257)	101 Md Mendelevium (258)	102 No Nobelium (259)	103 Lr Lawrencium (262)

ATOMIC MASSES OF THE ELEMENTS

Based on mass of C¹² at 12.00. Values in parentheses are the mass of the most stable or best known isotopes for elements which do not occur naturally.

Element	Symbol	Atomic Number	Atomic Mass	Element	Symbol	Atomic Number	Atomic Mass
Actinium	Ac	89	(227)	Mercury	Hg	80	200.6
Aluminum	Al	13	27.0	Molybdenum	Mo	42	95.9
Americium	Am	95	(243)	Neodymium	Nd	60	144.2
Antimony	Sb	51	121.8	Neon	Ne	10	20.2
Argon	Ar	18	39.9	Neptunium	Np	93	(237)
Arsenic	As	33	74.9	Nickel	Ni	28	58.7
Astatine	At	85	(210)	Niobium	Nb	41	92.9
Barium	Ba	56	137.3	Nitrogen	N	7	14.0
Berkelium	Bk	97	(247)	Nobelium	No	102	(259)
Beryllium	Be	4	9.0	Osmium	Os	76	190.2
Bismuth	Bi	83	209.0	Oxygen	O	8	16.0
Boron	B	5	10.8	Palladium	Pd	46	106.4
Bromine	Br	35	79.9	Phosphorus	P	15	31.0
Cadmium	Cd	48	112.4	Platinum	Pt	78	195.1
Calcium	Ca	20	40.1	Plutonium	Pu	94	(244)
Californium	Cf	98	(251)	Polonium	Po	84	(209)
Carbon	C	6	12.0	Potassium	K	19	39.1
Cerium	Ce	58	140.1	Praseodymium	Pr	59	140.9
Cesium	Cs	55	132.9	Promethium	Pm	61	(145)
Chlorine	Cl	17	35.5	Protactinium	Pa	91	231.0
Chromium	Cr	24	52.0	Radium	Ra	88	(226)
Cobalt	Co	27	58.9	Radon	Rn	86	(222)
Copper	Cu	29	63.5	Rhenium	Re	75	186.2
Curium	Cm	96	(247)	Rhodium	Rh	45	102.9
Dysprosium	Dy	66	162.5	Rubidium	Rb	37	85.5
Einsteinium	Es	99	(252)	Ruthenium	Ru	44	101.1
Erbium	Er	68	167.3	Rutherfordium	Rf	104	(261)
Europium	Eu	63	152.0	Samarium	Sm	62	150.4
Fermium	Fm	100	(257)	Scandium	Sc	21	45.0
Fluorine	F	9	19.0	Selenium	Se	34	79.0
Francium	Fr	87	(223)	Silicon	Si	14	28.1
Gadolinium	Gd	64	157.3	Silver	Ag	47	107.9
Gallium	Ga	31	69.7	Sodium	Na	11	23.0
Germanium	Ge	32	72.6	Strontium	Sr	38	87.6
Gold	Au	79	197.0	Sulphur	S	16	32.1
Hafnium	Hf	72	178.5	Tantalum	Ta	73	180.9
Hahnium	Ha	105	(262)	Technetium	Tc	43	(98)
Helium	He	2	4.0	Tellurium	Te	52	127.6
Holmium	Ho	67	164.9	Terbium	Tb	65	158.9
Hydrogen	H	1	1.0	Thallium	Tl	81	204.4
Indium	In	49	114.8	Thorium	Th	90	232.0
Iodine	I	53	126.9	Thulium	Tm	69	168.9
Iridium	Ir	77	192.2	Tin	Sn	50	118.7
Iron	Fe	26	55.8	Titanium	Ti	22	47.9
Krypton	Kr	36	83.8	Tungsten	W	74	183.8
Lanthanum	La	57	138.9	Uranium	U	92	238.0
Lawrencium	Lr	103	(262)	Vanadium	V	23	50.9
Lead	Pb	82	207.2	Xenon	Xe	54	131.3
Lithium	Li	3	6.9	Ytterbium	Yb	70	173.0
Lutetium	Lu	71	175.0	Yttrium	Y	39	88.9
Magnesium	Mg	12	24.3	Zinc	Zn	30	65.4
Manganese	Mn	25	54.9	Zirconium	Zr	40	91.2
Mendelevium	Md	101	(258)				

NAMES, FORMULAE, AND CHARGES OF SOME COMMON IONS

Positive ions (cations)		Negative ions (anions)	
Aluminum	Al^{3+}	Bromide	Br^-
Ammonium	NH_4^+	Carbonate	CO_3^{2-}
Barium	Ba^{2+}	Chlorate	ClO_3^-
Calcium	Ca^{2+}	Chloride	Cl^-
Chromium(II), chromous	Cr^{2+}	Chlorite	ClO_2^-
Chromium(III), chromic	Cr^{3+}	Chromate	CrO_4^{2-}
Copper(I)*, cuprous	Cu^+	Cyanide	CN^-
Copper(II), cupric	Cu^{2+}	Dichromate	$\text{Cr}_2\text{O}_7^{2-}$
Hydrogen	H^+	Dihydrogen phosphate	H_2PO_4^-
Hydronium	H_3O^+	Ethanoate, Acetate	CH_3COO^-
Iron(II)*, ferrous	Fe^{2+}	Fluoride	F^-
Iron(III), ferric	Fe^{3+}	Hydrogen carbonate, bicarbonate	HCO_3^-
Lead(II), plumbous	Pb^{2+}	Hydrogen oxalate, binoxalate	HC_2O_4^-
Lead(IV), plumbic	Pb^{4+}	Hydrogen sulphate, bisulphate	HSO_4^-
Lithium	Li^+	Hydrogen sulphide, bisulphide	HS^-
Magnesium	Mg^{2+}	Hydrogen sulphite, bisulphite	HSO_3^-
Manganese(II), manganous	Mn^{2+}	Hydroxide	OH^-
Manganese(IV)	Mn^{4+}	Hypochlorite	ClO^-
Mercury(I)*, mercurous	Hg_2^{2+}	Iodide	I^-
Mercury(II), mercuric	Hg^{2+}	Monohydrogen phosphate	HPO_4^{2-}
Potassium	K^+	Nitrate	NO_3^-
Silver	Ag^+	Nitrite	NO_2^-
Sodium	Na^+	Oxalate	$\text{C}_2\text{O}_4^{2-}$
Tin(II)*, stannous	Sn^{2+}	Oxide**	O^{2-}
Tin(IV), stannic	Sn^{4+}	Perchlorate	ClO_4^-
Zinc	Zn^{2+}	Permanganate	MnO_4^-
		Phosphate	PO_4^{3-}
		Sulphate	SO_4^{2-}
		Sulphide	S^{2-}
		Sulphite	SO_3^{2-}
		Thiocyanate	SCN^-

* Aqueous solutions are readily oxidized by air.

** Not stable in aqueous solutions.

SOLUBILITY OF COMMON COMPOUNDS IN WATER

The term soluble here means $> 0.1 \text{ mol/L}$ at 25°C .

NEGATIVE IONS (Anions)	POSITIVE IONS (Cations)	SOLUBILITY OF COMPOUNDS
All	Alkali ions: $\text{Li}^+, \text{Na}^+, \text{K}^+, \text{Rb}^+, \text{Cs}^+, \text{Fr}^+$	Soluble
All	Hydrogen ion, H^+	Soluble
All	Ammonium ion, NH_4^+	Soluble
Nitrate, NO_3^-	All	Soluble
$\left. \begin{array}{l} \text{Chloride, } \text{Cl}^- \\ \text{or} \\ \text{Bromide, } \text{Br}^- \\ \text{or} \\ \text{Iodide, } \text{I}^- \end{array} \right\}$	All others	Soluble
	$\text{Ag}^+, \text{Pb}^{2+}, \text{Cu}^+$	Low Solubility
$\left. \begin{array}{l} \text{Sulphate, } \text{SO}_4^{2-} \end{array} \right\}$	All others	Soluble
	$\text{Ag}^+, \text{Ca}^{2+}, \text{Sr}^{2+}, \text{Ba}^{2+}, \text{Pb}^{2+}$	Low Solubility
$\left. \begin{array}{l} \text{Sulphide, } \text{S}^{2-} \end{array} \right\}$	Alkali ions, $\text{H}^+, \text{NH}_4^+, \text{Be}^{2+}$ $\text{Mg}^{2+}, \text{Ca}^{2+}, \text{Sr}^{2+}, \text{Ba}^{2+}$	Soluble
	All others	Low Solubility
$\left. \begin{array}{l} \text{Hydroxide, } \text{OH}^- \end{array} \right\}$	Alkali ions, $\text{H}^+, \text{NH}_4^+, \text{Sr}^{2+}$	Soluble
	All others	Low Solubility
$\left. \begin{array}{l} \text{Phosphate, } \text{PO}_4^{3-} \\ \text{or} \\ \text{Carbonate, } \text{CO}_3^{2-} \\ \text{or} \\ \text{Sulphite, } \text{SO}_3^{2-} \end{array} \right\}$	Alkali ions, $\text{H}^+, \text{NH}_4^+$	Soluble
	All others	Low Solubility

SOLUBILITY PRODUCT CONSTANTS AT 25°C

Name	Formula	K_{sp}
barium carbonate	BaCO ₃	2.6×10^{-9}
barium chromate	BaCrO ₄	1.2×10^{-10}
barium sulphate	BaSO ₄	1.1×10^{-10}
calcium carbonate	CaCO ₃	5.0×10^{-9}
calcium oxalate	CaC ₂ O ₄	2.3×10^{-9}
calcium sulphate	CaSO ₄	7.1×10^{-5}
copper(I) iodide	CuI	1.3×10^{-12}
copper(II) iodate	Cu(IO ₃) ₂	6.9×10^{-8}
copper(II) sulphide	CuS	6.0×10^{-37}
iron(II) hydroxide	Fe(OH) ₂	4.9×10^{-17}
iron(II) sulphide	FeS	6.0×10^{-19}
iron(III) hydroxide	Fe(OH) ₃	2.6×10^{-39}
lead(II) bromide	PbBr ₂	6.6×10^{-6}
lead(II) chloride	PbCl ₂	1.2×10^{-5}
lead(II) iodate	Pb(IO ₃) ₂	3.7×10^{-13}
lead(II) iodide	PbI ₂	8.5×10^{-9}
lead(II) sulphate	PbSO ₄	1.8×10^{-8}
magnesium carbonate	MgCO ₃	6.8×10^{-6}
magnesium hydroxide	Mg(OH) ₂	5.6×10^{-12}
silver bromate	AgBrO ₃	5.3×10^{-5}
silver bromide	AgBr	5.4×10^{-13}
silver carbonate	Ag ₂ CO ₃	8.5×10^{-12}
silver chloride	AgCl	1.8×10^{-10}
silver chromate	Ag ₂ CrO ₄	1.1×10^{-12}
silver iodate	AgIO ₃	3.2×10^{-8}
silver iodide	AgI	8.5×10^{-17}
strontium carbonate	SrCO ₃	5.6×10^{-10}
strontium fluoride	SrF ₂	4.3×10^{-9}
strontium sulphate	SrSO ₄	3.4×10^{-7}
zinc sulphide	ZnS	2.0×10^{-25}

RELATIVE STRENGTHS OF BRÖNSTED-LOWRY ACIDS AND BASES

in aqueous solution at room temperature

Strength of Acid	Name of Acid	Acid	Base	K_a	Strength of Base
Strong ↑	Perchloric	HClO_4	$\rightarrow \text{H}^+ + \text{ClO}_4^-$ very large	Weak ↓
	Hydriodic	HI	$\rightarrow \text{H}^+ + \text{I}^-$ very large	
	Hydrobromic	HBr	$\rightarrow \text{H}^+ + \text{Br}^-$ very large	
	Hydrochloric	HCl	$\rightarrow \text{H}^+ + \text{Cl}^-$ very large	
	Nitric	HNO_3	$\rightarrow \text{H}^+ + \text{NO}_3^-$ very large	
	Sulphuric	H_2SO_4	$\rightarrow \text{H}^+ + \text{HSO}_4^-$ very large	
	Hydronium Ion	H_3O^+	$\rightleftharpoons \text{H}^+ + \text{H}_2\text{O}$ 1.0	
	Iodic	HIO_3	$\rightleftharpoons \text{H}^+ + \text{IO}_3^-$ 1.7×10^{-1}	
	Oxalic	$\text{H}_2\text{C}_2\text{O}_4$	$\rightleftharpoons \text{H}^+ + \text{HC}_2\text{O}_4^-$ 5.9×10^{-2}	
	Sulphurous ($\text{SO}_2 + \text{H}_2\text{O}$)	H_2SO_3	$\rightleftharpoons \text{H}^+ + \text{HSO}_3^-$ 1.5×10^{-2}	
	Hydrogen sulphate ion	HSO_4^-	$\rightleftharpoons \text{H}^+ + \text{SO}_4^{2-}$ 1.2×10^{-2}	
	Phosphoric	H_3PO_4	$\rightleftharpoons \text{H}^+ + \text{H}_2\text{PO}_4^-$ 7.5×10^{-3}	
	Hexaaquoiron ion, iron(III) ion	$\text{Fe}(\text{H}_2\text{O})_6^{3+}$	$\rightleftharpoons \text{H}^+ + \text{Fe}(\text{H}_2\text{O})_5(\text{OH})^{2+}$ 6.0×10^{-3}	
	Citric	$\text{H}_3\text{C}_6\text{H}_5\text{O}_7$	$\rightleftharpoons \text{H}^+ + \text{H}_2\text{C}_6\text{H}_5\text{O}_7^-$ 7.1×10^{-4}	
	Nitrous	HNO_2	$\rightleftharpoons \text{H}^+ + \text{NO}_2^-$ 4.6×10^{-4}	
	Hydrofluoric	HF	$\rightleftharpoons \text{H}^+ + \text{F}^-$ 3.5×10^{-4}	
	Methanoic, formic	HCOOH	$\rightleftharpoons \text{H}^+ + \text{HCOO}^-$ 1.8×10^{-4}	
	Hexaaquochromium ion, chromium(III) ion	$\text{Cr}(\text{H}_2\text{O})_6^{3+}$	$\rightleftharpoons \text{H}^+ + \text{Cr}(\text{H}_2\text{O})_5(\text{OH})^{2+}$ 1.5×10^{-4}	
	Benzoic	$\text{C}_6\text{H}_5\text{COOH}$	$\rightleftharpoons \text{H}^+ + \text{C}_6\text{H}_5\text{COO}^-$ 6.5×10^{-5}	
	Hydrogen oxalate ion	HC_2O_4^-	$\rightleftharpoons \text{H}^+ + \text{C}_2\text{O}_4^{2-}$ 6.4×10^{-5}	
	Ethanoic, acetic	CH_3COOH	$\rightleftharpoons \text{H}^+ + \text{CH}_3\text{COO}^-$ 1.8×10^{-5}	
	Dihydrogen citrate ion	$\text{H}_2\text{C}_6\text{H}_5\text{O}_7^-$	$\rightleftharpoons \text{H}^+ + \text{HC}_6\text{H}_5\text{O}_7^{2-}$ 1.7×10^{-5}	
	Hexaaquoaluminum ion, aluminum ion	$\text{Al}(\text{H}_2\text{O})_6^{3+}$	$\rightleftharpoons \text{H}^+ + \text{Al}(\text{H}_2\text{O})_5(\text{OH})^{2+}$ 1.4×10^{-5}	
	Carbonic ($\text{CO}_2 + \text{H}_2\text{O}$)	H_2CO_3	$\rightleftharpoons \text{H}^+ + \text{HCO}_3^-$ 4.3×10^{-7}	
	Monohydrogen citrate ion	$\text{HC}_6\text{H}_5\text{O}_7^{2-}$	$\rightleftharpoons \text{H}^+ + \text{C}_6\text{H}_5\text{O}_7^{3-}$ 4.1×10^{-7}	
	Hydrogen sulphite ion	HSO_3^-	$\rightleftharpoons \text{H}^+ + \text{SO}_3^{2-}$ 1.0×10^{-7}	
	Hydrogen sulphide	H_2S	$\rightleftharpoons \text{H}^+ + \text{HS}^-$ 9.1×10^{-8}	
	Dihydrogen phosphate ion	H_2PO_4^-	$\rightleftharpoons \text{H}^+ + \text{HPO}_4^{2-}$ 6.2×10^{-8}	
Boric	H_3BO_3	$\rightleftharpoons \text{H}^+ + \text{H}_2\text{BO}_3^-$ 7.3×10^{-10}		
Ammonium ion	NH_4^+	$\rightleftharpoons \text{H}^+ + \text{NH}_3$ 5.6×10^{-10}		
Hydrocyanic	HCN	$\rightleftharpoons \text{H}^+ + \text{CN}^-$ 4.9×10^{-10}		
Phenol	$\text{C}_6\text{H}_5\text{OH}$	$\rightleftharpoons \text{H}^+ + \text{C}_6\text{H}_5\text{O}^-$ 1.3×10^{-10}		
Hydrogen carbonate ion	HCO_3^-	$\rightleftharpoons \text{H}^+ + \text{CO}_3^{2-}$ 5.6×10^{-11}		
Hydrogen peroxide	H_2O_2	$\rightleftharpoons \text{H}^+ + \text{HO}_2^-$ 2.4×10^{-12}		
Monohydrogen phosphate ion	HPO_4^{2-}	$\rightleftharpoons \text{H}^+ + \text{PO}_4^{3-}$ 2.2×10^{-13}		
Water	H_2O	$\rightleftharpoons \text{H}^+ + \text{OH}^-$ 1.0×10^{-14}		
Hydroxide ion	OH^-	$\leftarrow \text{H}^+ + \text{O}^{2-}$ very small		
Ammonia	NH_3	$\leftarrow \text{H}^+ + \text{NH}_2^-$ very small		
Weak					Strong

ACID-BASE INDICATORS

INDICATOR	pH RANGE IN WHICH COLOUR CHANGE OCCURS	COLOUR CHANGE AS pH INCREASES
Methyl violet	0.0 – 1.6	yellow to blue
Thymol blue	1.2 – 2.8	red to yellow
Orange IV	1.4 – 2.8	red to yellow
Methyl orange	3.2 – 4.4	red to yellow
Bromcresol green	3.8 – 5.4	yellow to blue
Methyl red	4.8 – 6.0	red to yellow
Chlorophenol red	5.2 – 6.8	yellow to red
Bromthymol blue	6.0 – 7.6	yellow to blue
Phenol red	6.6 – 8.0	yellow to red
Neutral red	6.8 – 8.0	red to amber
Thymol blue	8.0 – 9.6	yellow to blue
Phenolphthalein	8.2 – 10.0	colourless to pink
Thymolphthalein	9.4 – 10.6	colourless to blue
Alizarin yellow	10.1 – 12.0	yellow to red
Indigo carmine	11.4 – 13.0	blue to yellow

STANDARD REDUCTION POTENTIALS OF HALF-CELLS

Ionic Concentrations are at 1M in Water at 25° C

STRENGTH OF OXIDIZING AGENT	OXIDIZING AGENTS	REDUCING AGENTS	E°(VOLTS)	STRENGTH OF REDUCING AGENT
↑ strong	$F_{2(g)} + 2e^- \rightleftharpoons 2F^-$	$2F^-$	+2.87	↓ weak
	$S_2O_8^{2-} + 2e^- \rightleftharpoons 2SO_4^{2-}$	$2SO_4^{2-}$	+2.01	
	$H_2O_2 + 2H^+ + 2e^- \rightleftharpoons 2H_2O$	$2H_2O$	+1.78	
	$MnO_4^- + 8H^+ + 5e^- \rightleftharpoons Mn^{2+} + 4H_2O$	$Mn^{2+} + 4H_2O$	+1.51	
	$Au^{3+} + 3e^- \rightleftharpoons Au_{(s)}$	$Au_{(s)}$	+1.50	
	$BrO_3^- + 6H^+ + 5e^- \rightleftharpoons \frac{1}{2}Br_{2(l)} + 3H_2O$	$\frac{1}{2}Br_{2(l)} + 3H_2O$	+1.48	
	$ClO_4^- + 8H^+ + 8e^- \rightleftharpoons Cl^- + 4H_2O$	$Cl^- + 4H_2O$	+1.39	
	$Cl_{2(g)} + 2e^- \rightleftharpoons 2Cl^-$	$2Cl^-$	+1.36	
	$Cr_2O_7^{2-} + 14H^+ + 6e^- \rightleftharpoons 2Cr^{3+} + 7H_2O$	$2Cr^{3+} + 7H_2O$	+1.23	
	$\frac{1}{2}O_{2(g)} + 2H^+ + 2e^- \rightleftharpoons H_2O$	H_2O	+1.23	
	$MnO_{2(s)} + 4H^+ + 2e^- \rightleftharpoons Mn^{2+} + 2H_2O$	$Mn^{2+} + 2H_2O$	+1.22	
	$IO_3^- + 6H^+ + 5e^- \rightleftharpoons \frac{1}{2}I_{2(s)} + 3H_2O$	$\frac{1}{2}I_{2(s)} + 3H_2O$	+1.20	
	$Br_{2(l)} + 2e^- \rightleftharpoons 2Br^-$	$2Br^-$	+1.09	
	$AuCl_4^- + 3e^- \rightleftharpoons Au_{(s)} + 4Cl^-$	$Au_{(s)} + 4Cl^-$	+1.00	
	$NO_3^- + 4H^+ + 3e^- \rightleftharpoons NO_{(g)} + 2H_2O$	$NO_{(g)} + 2H_2O$	+0.96	
	$Hg^{2+} + 2e^- \rightleftharpoons Hg_{(l)}$	$Hg_{(l)}$	+0.85	
	$\frac{1}{2}O_{2(g)} + 2H^+(10^{-7}M) + 2e^- \rightleftharpoons H_2O$	H_2O	+0.82	
	$2NO_3^- + 4H^+ + 2e^- \rightleftharpoons N_2O_4 + 2H_2O$	$N_2O_4 + 2H_2O$	+0.80	
	$Ag^+ + e^- \rightleftharpoons Ag_{(s)}$	$Ag_{(s)}$	+0.80	
	$\frac{1}{2}Hg_2^{2+} + e^- \rightleftharpoons Hg_{(l)}$	$Hg_{(l)}$	+0.80	
	$Fe^{3+} + e^- \rightleftharpoons Fe^{2+}$	Fe^{2+}	+0.77	
	$O_{2(g)} + 2H^+ + 2e^- \rightleftharpoons H_2O_2$	H_2O_2	+0.70	
	$MnO_4^- + 2H_2O + 3e^- \rightleftharpoons MnO_{2(s)} + 4OH^-$	$MnO_{2(s)} + 4OH^-$	+0.60	
	$I_{2(s)} + 2e^- \rightleftharpoons 2I^-$	$2I^-$	+0.54	
	$Cu^+ + e^- \rightleftharpoons Cu_{(s)}$	$Cu_{(s)}$	+0.52	
	$H_2SO_3 + 4H^+ + 4e^- \rightleftharpoons S_{(s)} + 3H_2O$	$S_{(s)} + 3H_2O$	+0.45	
	$Cu^{2+} + 2e^- \rightleftharpoons Cu_{(s)}$	$Cu_{(s)}$	+0.34	
	$SO_4^{2-} + 4H^+ + 2e^- \rightleftharpoons H_2SO_3 + H_2O$	$H_2SO_3 + H_2O$	+0.17	
	$Cu^{2+} + e^- \rightleftharpoons Cu^+$	Cu^+	+0.15	
	$Sn^{4+} + 2e^- \rightleftharpoons Sn^{2+}$	Sn^{2+}	+0.15	
	$S_{(s)} + 2H^+ + 2e^- \rightleftharpoons H_2S_{(g)}$	$H_2S_{(g)}$	+0.14	
	$2H^+ + 2e^- \rightleftharpoons H_{2(g)}$	$H_{2(g)}$	+0.00	
	$Pb^{2+} + 2e^- \rightleftharpoons Pb_{(s)}$	$Pb_{(s)}$	-0.13	
	$Sn^{2+} + 2e^- \rightleftharpoons Sn_{(s)}$	$Sn_{(s)}$	-0.14	
	$Ni^{2+} + 2e^- \rightleftharpoons Ni_{(s)}$	$Ni_{(s)}$	-0.26	
	$H_3PO_4 + 2H^+ + 2e^- \rightleftharpoons H_3PO_3 + H_2O$	$H_3PO_3 + H_2O$	-0.28	
	$Co^{2+} + 2e^- \rightleftharpoons Co_{(s)}$	$Co_{(s)}$	-0.28	
	$Se_{(s)} + 2H^+ + 2e^- \rightleftharpoons H_2Se$	H_2Se	-0.40	
	$Cr^{3+} + e^- \rightleftharpoons Cr^{2+}$	Cr^{2+}	-0.41	
	$2H_2O + 2e^- \rightleftharpoons H_2 + 2OH^-(10^{-7}M)$	$H_2 + 2OH^-(10^{-7}M)$	-0.41	
	$Fe^{2+} + 2e^- \rightleftharpoons Fe_{(s)}$	$Fe_{(s)}$	-0.45	
	$Ag_2S_{(s)} + 2e^- \rightleftharpoons 2Ag_{(s)} + S^{2-}$	$2Ag_{(s)} + S^{2-}$	-0.69	
	$Cr^{3+} + 3e^- \rightleftharpoons Cr_{(s)}$	$Cr_{(s)}$	-0.74	
	$Zn^{2+} + 2e^- \rightleftharpoons Zn_{(s)}$	$Zn_{(s)}$	-0.76	
	$Te_{(s)} + 2H^+ + 2e^- \rightleftharpoons H_2Te$	H_2Te	-0.79	
	$2H_2O + 2e^- \rightleftharpoons H_{2(g)} + 2OH^-$	$H_{2(g)} + 2OH^-$	-0.83	
	$Mn^{2+} + 2e^- \rightleftharpoons Mn_{(s)}$	$Mn_{(s)}$	-1.19	
	$Al^{3+} + 3e^- \rightleftharpoons Al_{(s)}$	$Al_{(s)}$	-1.66	
	$Mg^{2+} + 2e^- \rightleftharpoons Mg_{(s)}$	$Mg_{(s)}$	-2.37	
	$Na^+ + e^- \rightleftharpoons Na_{(s)}$	$Na_{(s)}$	-2.71	
	$Ca^{2+} + 2e^- \rightleftharpoons Ca_{(s)}$	$Ca_{(s)}$	-2.87	
	$Sr^{2+} + 2e^- \rightleftharpoons Sr_{(s)}$	$Sr_{(s)}$	-2.89	
	$Ba^{2+} + 2e^- \rightleftharpoons Ba_{(s)}$	$Ba_{(s)}$	-2.91	
	$K^+ + e^- \rightleftharpoons K_{(s)}$	$K_{(s)}$	-2.93	
	$Rb^+ + e^- \rightleftharpoons Rb_{(s)}$	$Rb_{(s)}$	-2.98	
	$Cs^+ + e^- \rightleftharpoons Cs_{(s)}$	$Cs_{(s)}$	-3.03	
weak	$Li^+ + e^- \rightleftharpoons Li_{(s)}$	$Li_{(s)}$	-3.04	↓ strong

Overpotential Effect

Overpotential Effect